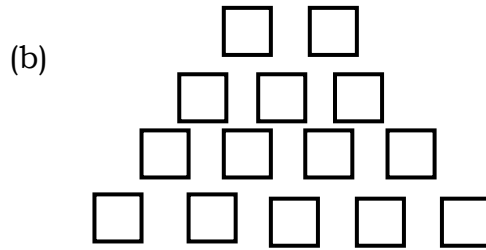
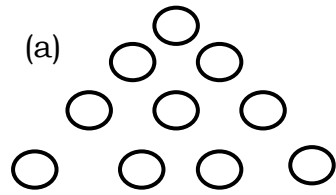


DISTRICT INSTITUTE OF EDUCATION BANDIPORA
ASSIGNMENT: U1 + U2. MATHEMATICS CLASS: 2nd

Q.1: Count and write:



Q.2: Which is more or less:

Boys = 10, Girls = 8
Classrooms = 5 Windows = 10

➤ Do five more questions of same nature as in Q.1 and Q.2. seek help from your friends.

Q.3: _____ is before 17.

17 is just before _____.

20 is just before _____.

24 is just after _____.

Write 5 more.

Q.4: Write in ascending order from:

(a) 2 to 9 (b) 14 to 22

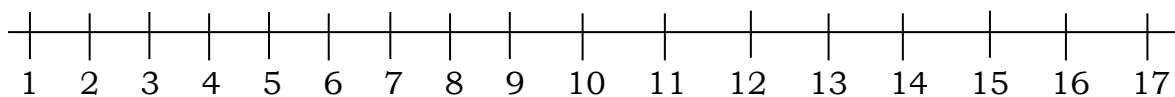
Write in descending order:

(a) From 2 to 8 (b) 21 to 29

Q.5: Which is heavier, Tick:



Q.6: Skip counting by 2's and 3's in the number line:



Q.7: Continue the patterns with counting in 5, 5.

5, 10, 15, _____, _____, _____, _____, _____

21, 26, 31, _____, _____, _____, _____, _____

Q.8: 3 tens + 17 ones = 4 tens + 7 ones

In this way:

5 tens + 11 ones = _____ + _____

8 tens + 14 ones = _____ + _____

16 ones = 1 tens + 6 ones

12 ones = _____ ten + _____ ones

41 ones = _____ ten + _____ ones

Q.9: Add:

27	93	63	54	96	84
+42	+35	+42	+32	+21	+32
_____	_____	_____	_____	_____	_____
_____	_____	_____	_____	_____	_____